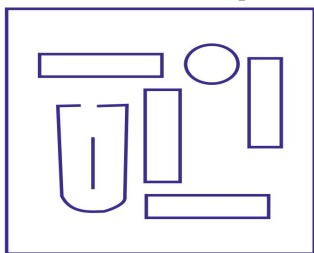



## EMBEDDED FIGURE NON VERBAL REASONING

Q.1. Which figure includes all the specific parts of the question figure?



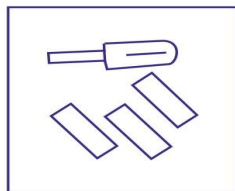
Question figure

Answer



figure

(A)



(B)




(C)



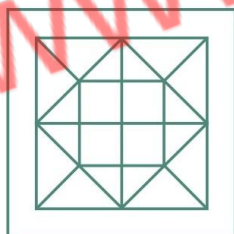
(D)

Q.2. Find the answer figure which includes the question figure.

Question figure



Answer figure



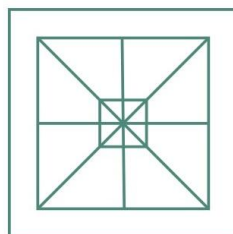
(A)



(B)



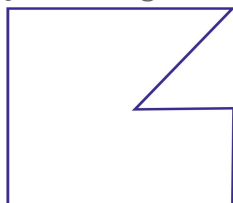
(C)



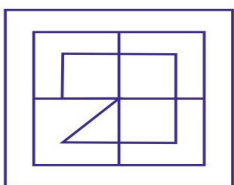
(D)

Q.3. In which answer figure, the question figure is included?

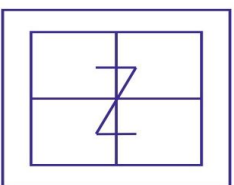
Question figure



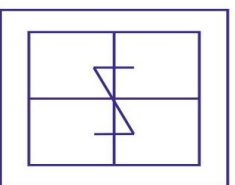
Answer figure



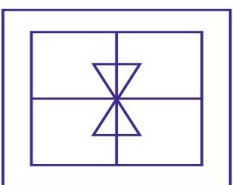
(A)



(B)



(C)



(D)

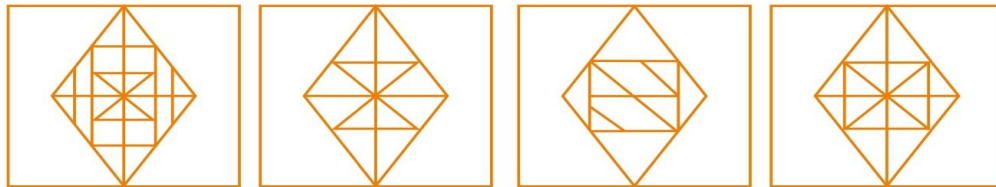


Q.4. Which answer figure includes the question figure ?

Question figure



Answer figure



(A)

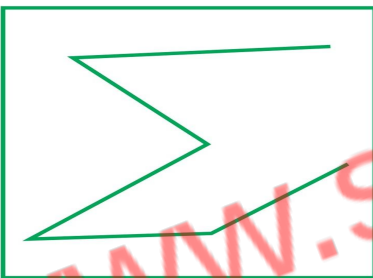
(B)

(C)

(D)

Q.5. From the given answer figures, find that answer figure which includes the question figure.

Question figure



Answer figure



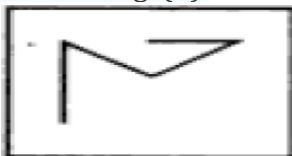
(A)

(B)

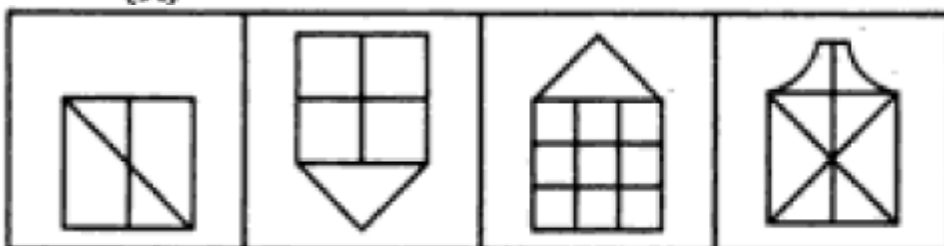
(C)

(D)

Q.6. Fig. (X) is embedded in any of the four alternative figures. Find the alternative which contains fig. (X).



(X)



(a)

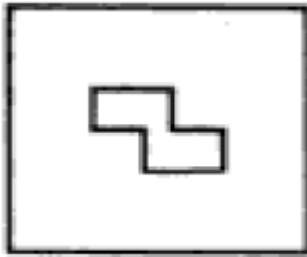
(b)

(c)

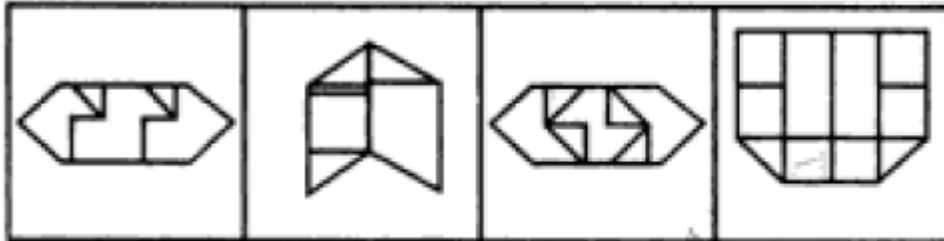
(d)



Q.7. Fig. (X) is embedded in any of the four alternative figures. Find the alternative which contains fig. (X).



(X)



(a)

(b)

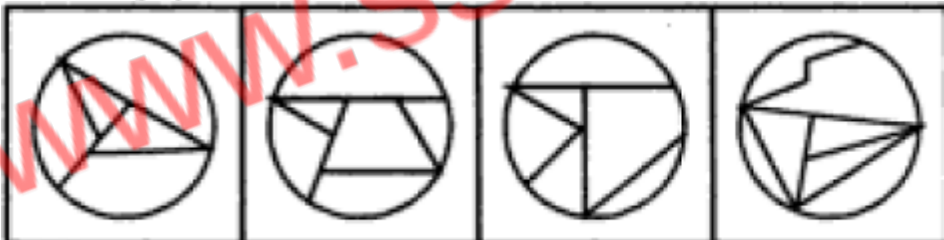
(c)

(d)

Q.8. Fig. (X) is embedded in any of the four alternative figures. Find the alternative which contains fig. (X).



(X)



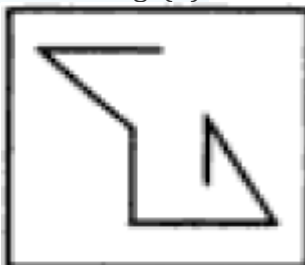
(a)

(b)

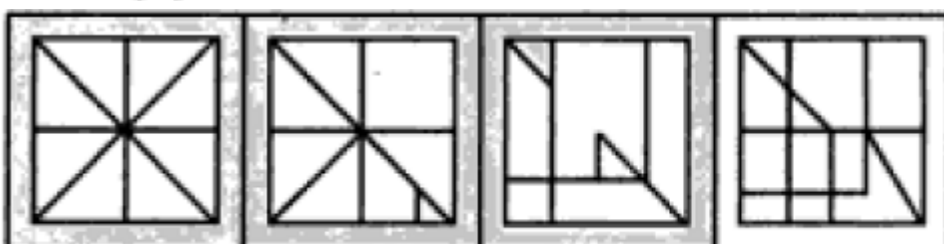
(c)

(d)

Q9. Fig. (X) is embedded in any of the four alternative figures. Find the alternative which contains fig. (X).



(X)



(a)

(b)

(c)

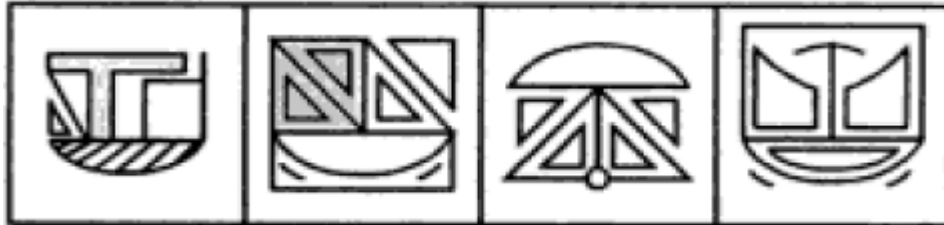
(d)



Q.10. Fig. (X) is embedded in any of the four alternative figures. Find the alternative which contains fig. (X).



(X)



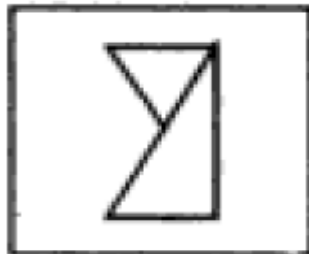
(a)

(b)

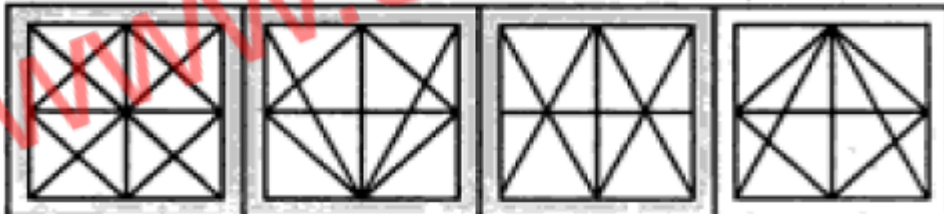
(c)

(d)

Q.11. Fig. (X) is embedded in any of the four alternative figures. Find the alternative which contains fig. (X).



(X)



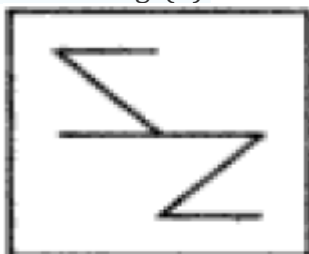
(a)

(b)

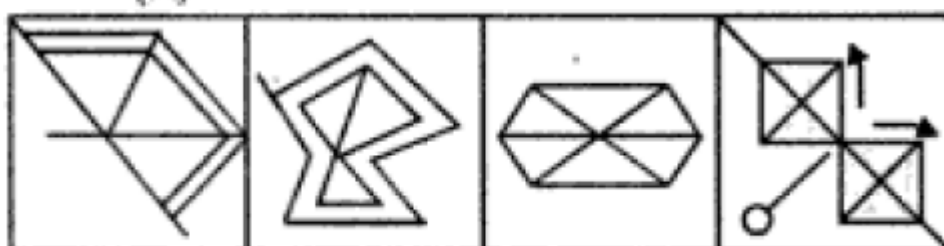
(c)

(d)

Q.12. Fig. (X) is embedded in any of the four alternative figures. Find the alternative which contains fig. (X).



(X)



(a)

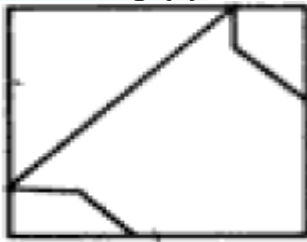
(b)

(c)

(d)



Q.13. Fig. (X) is embedded in any of the four alternative figures. Find the alternative which contains fig. (X).



(X)



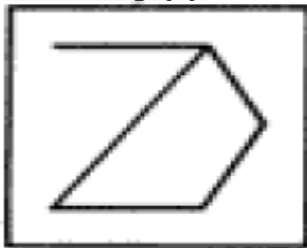
(a)

(b)

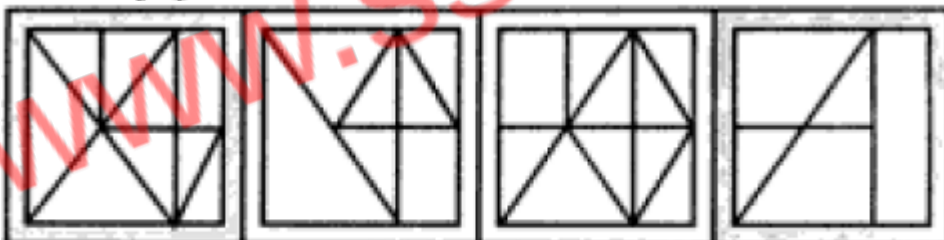
(c)

(d)

Q.14. Fig. (X) is embedded in any of the four alternative figures. Find the alternative which contains fig. (X).



(X)



(a)

(b)

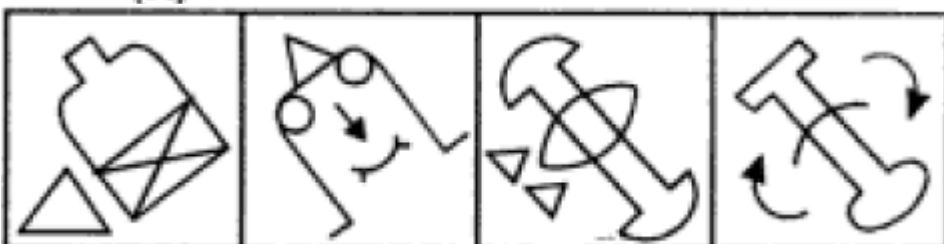
(c)

(d)

Q.15. Fig. (X) is embedded in any of the four alternative figures. Find the alternative which contains fig. (X).



(X)



(a)

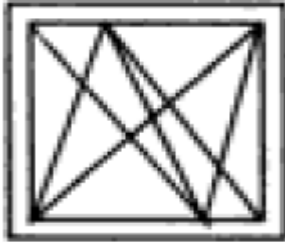
(b)

(c)

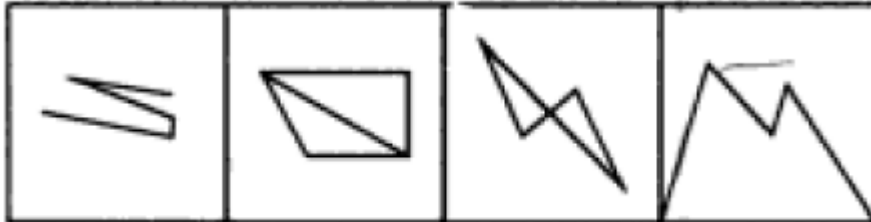
(d)



Q.16. Fig. (X) is embedded in any of the four alternative figures. Find the alternative which contains fig. (X).



(X)



(a)

(b)

(c)

(d)

Q.17. Fig. (X) is embedded in any of the four alternative figures. Find the alternative which contains fig. (X).



(X)



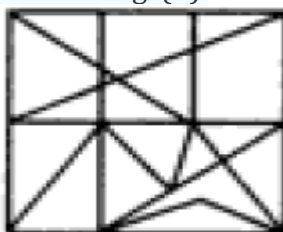
(a)

(b)

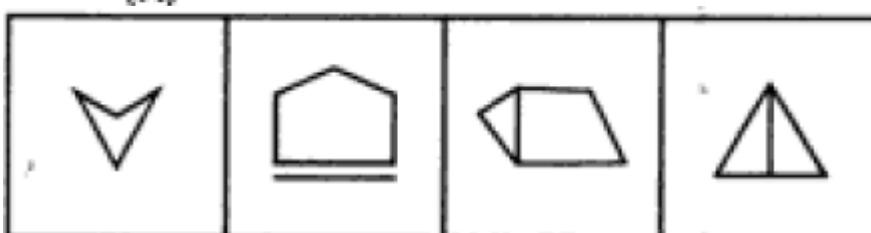
(c)

(d)

Q.18. Fig. (X) is embedded in any of the four alternative figures. Find the alternative which contains fig. (X).



(X)



(a)

(b)

(c)

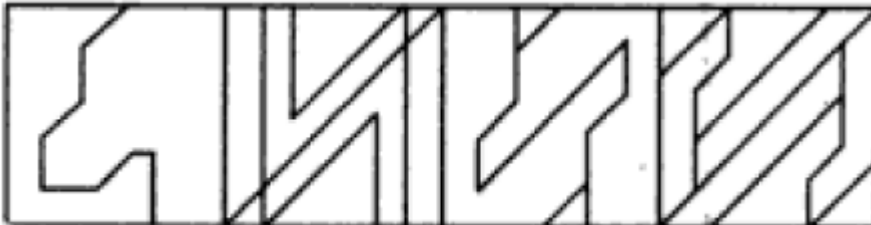
(d)



Q.19. Fig. (X) is embedded in any of the four alternative figures. Find the alternative which contains fig. (X).



(X)



(a)

(b)

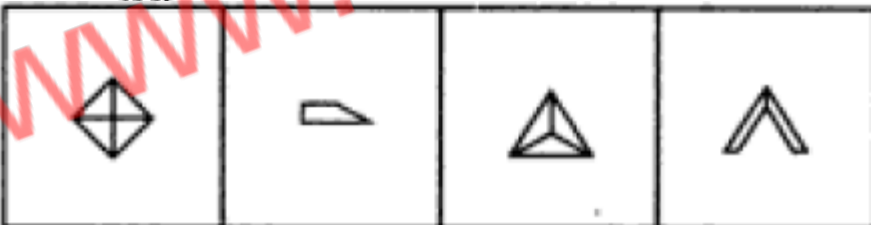
(c)

(d)

Q.20. Fig. (X) is embedded in any of the four alternative figures. Find the alternative which contains fig. (X).



(X)



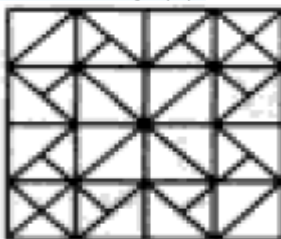
(a)

(b)

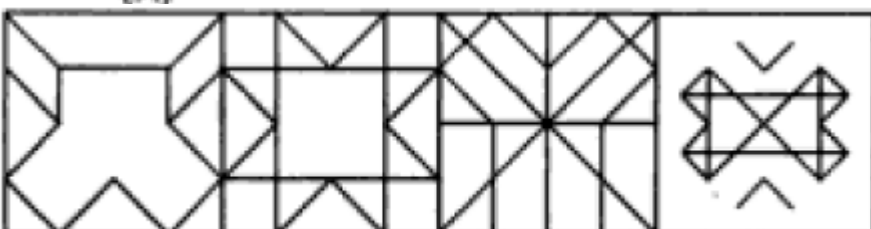
(c)

(d)

Q.21. Fig. (X) is embedded in any of the four alternative figures. Find the alternative which contains fig. (X).



(X)



(a)


(b)

(c)

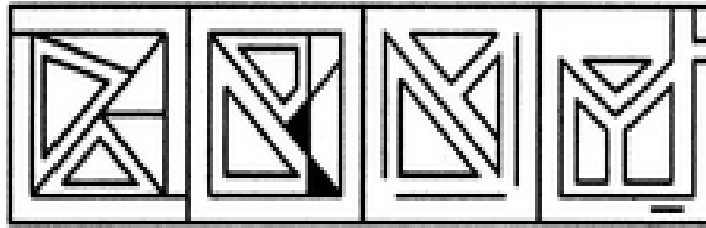
(d)



Q.22 Find out the alternative figure which contains figure (X) as its part.



(X)



1)

(2)

(3)

(4)

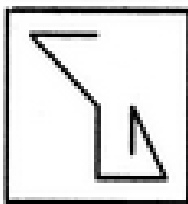
A. 1

B. 2

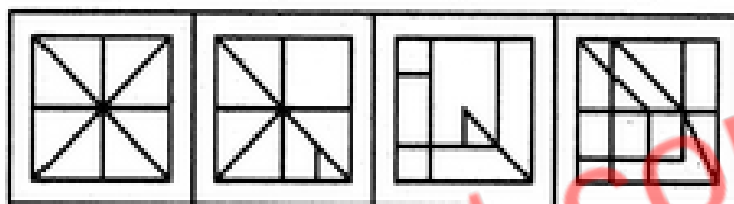
C. 3

D. 4

Q.23 Find out the alternative figure which contains figure (X) as its part.



(X)



(1)

(2)

(3)

(4)

A. 1

B. 2

C. 3

D. 4

Answers

|      |      |      |      |      |
|------|------|------|------|------|
| 1-A  | 2-C  | 3-D  | 4-D  | 5-C  |
| 6-D  | 7-C  | 8-B  | 9-D  | 10-B |
| 11-C | 12-D | 13-D | 14-C | 15-C |
| 16-A | 17-C | 18-C | 19-C | 20-B |
| 21-B | 22-A | 23-D |      |      |